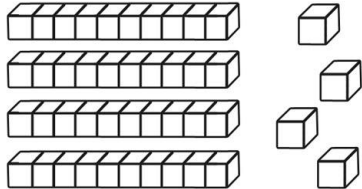

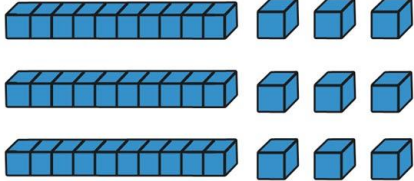
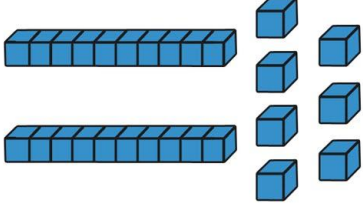
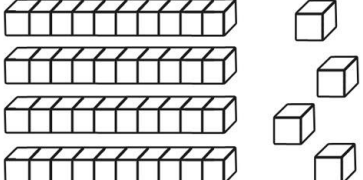

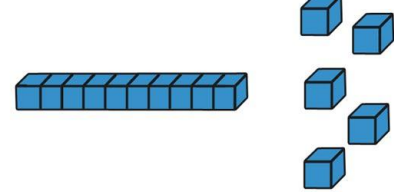


# Place Value

Number	Words	Expanded Form	Picture
	___tens ___ones	$50 + 2 = \underline{\quad}$	
	3 tens 9 ones	$\underline{\quad} + \underline{\quad} = \underline{\quad}$	
	___tens ___ones	$20 + 7 = \underline{\quad}$	
	___tens ___ones	$\underline{\quad} + \underline{\quad} = \underline{\quad}$	
75	___tens ___ones	$\underline{\quad} + \underline{\quad} = \underline{\quad}$	
15	___tens ___ones	$\underline{\quad} + \underline{\quad} = \underline{\quad}$	
	___tens ___ones	$70 + 8 = \underline{\quad}$	

# Place Value Answers

Number	Words	Expanded Form	Picture
52	5 tens 2 ones	$50 + 2 = 52$	
39	3 tens 9 ones	$30 + 9 = 39$	
27	2 tens 7 ones	$20 + 7 = 27$	
44	4 tens 4 ones	$40 + 4 = 44$	
75	7 tens 5 ones	$70 + 5 = 75$	
15	1 tens 5 ones	$10 + 5 = 15$	
78	7 tens 8 ones	$70 + 8 = 78$	